

DUMPS ARENA

ArchiMate 2 Part 1 Examination

The Open Group OG0-021

Version Demo

Total Demo Questions: 10

Total Premium Questions: 80

Buy Premium PDF

<https://dumpsarena.co>

sales@dumpsarena.co

sales@dumpsarena.co
dumpsarena.co

Topic Break Down

Topic	No. of Questions
Topic 1, Volume A	39
Topic 2, Volume B	41
Total	80

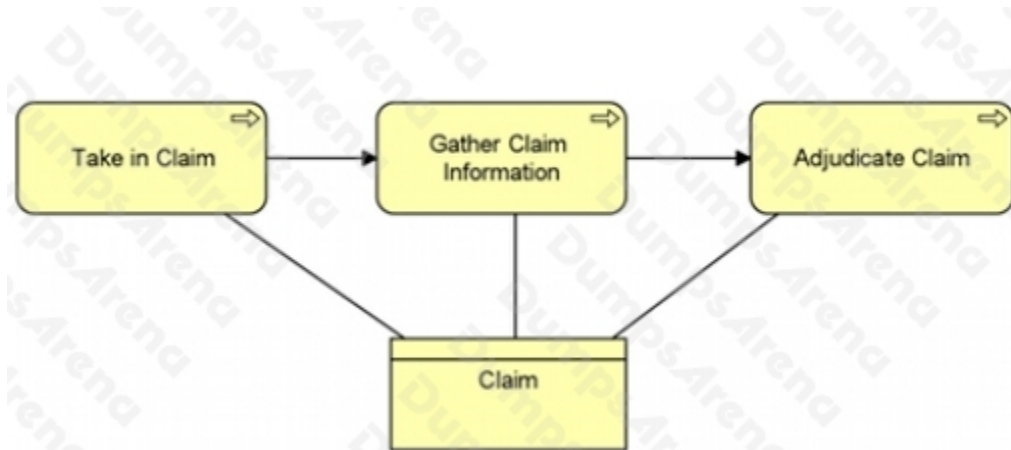
QUESTION NO: 1

Which of the following answers correctly describes the junction relationship?

- A. It connects structural relationships of different types
- B. It connects dynamic relationships of the same type
- C. It connects dynamic relationships of different types
- D. It connects structural relationships of the same type

ANSWER: B**QUESTION NO: 2**

At ArchiSurance, the Take in Claim process creates a Claim business object, while the remaining processes in the sequence below refer to and update the Claim business object.



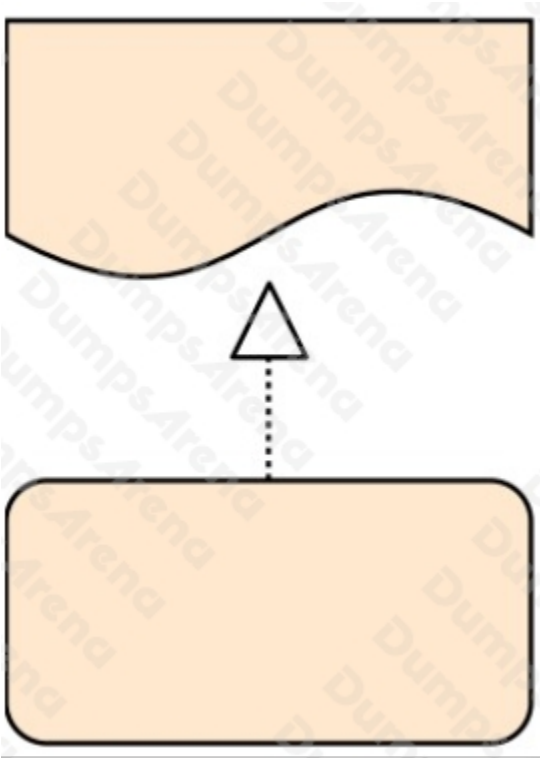
Which structural relationship could replace the association relationships in the diagram to more precisely describe how ArchiSurance Claim processes interact with the Claim business object?

- A. Used By
- B. Flow
- C. Assignment
- D. Access

ANSWER: D

QUESTION NO: 3

Consider the following diagram:



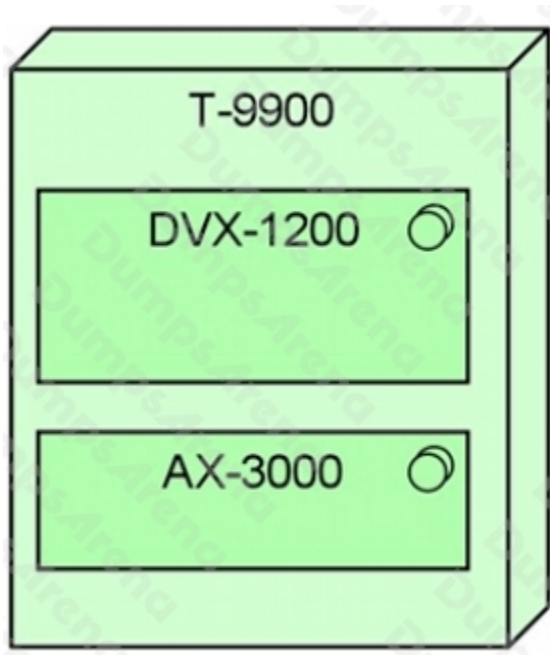
Which of the following best describes what this diagram represents?

- A. A work package that realizes a deliverable
- B. A business process that realizes a representation
- C. A work package that realizes a gap
- D. A plateau that realizes a gap

ANSWER: A

QUESTION NO: 4

The diagram below shows key elements of the configuration of ArchiSurance's newest and most powerful high-end server, which is a model T-9900:



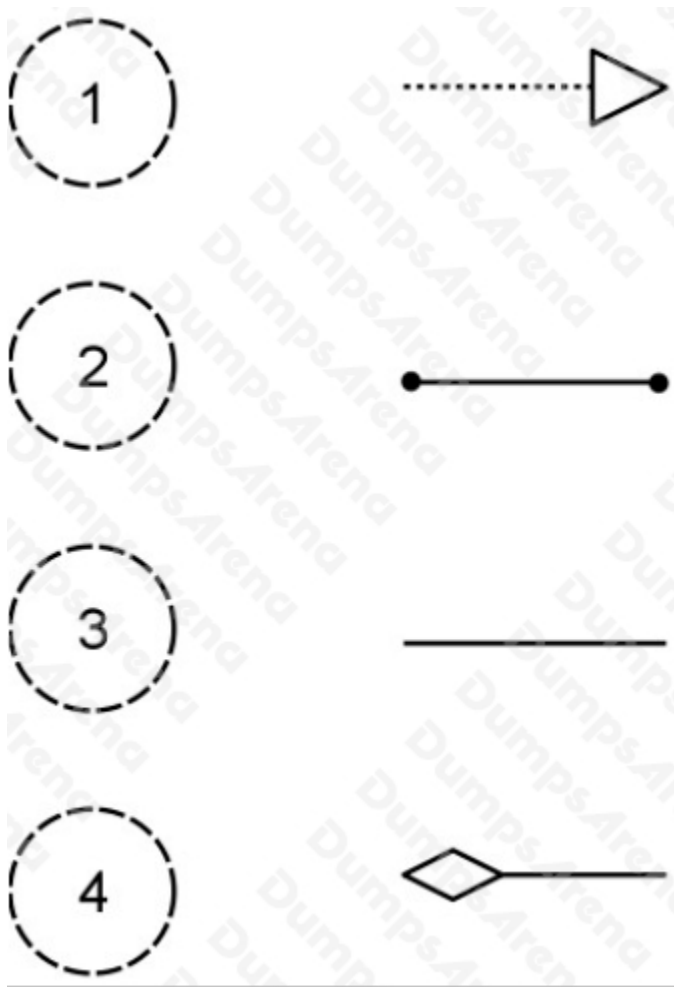
Which of the following descriptions of the configuration is most consistent with the diagram?

- A. The T-9900 is fitted with a DVX-1200 cooling system and and AX-3000 onboard disk array
- B. The T-9900 is running PRO-FIT's custom, internally-developed DVX-1200 software for enterprise risk analysis and is fitted with an AX-3000 onboard disk array
- C. The T-9900 node is running DVX-1200 middleware and the AX-3000 operating system software
- D. The T-9900 is an assembly of DVX-1200 processing units and AX-3000 high-speed memory arrays

ANSWER: C

QUESTION NO: 5

Consider the following four relationships, in the context of derived structural relationships:



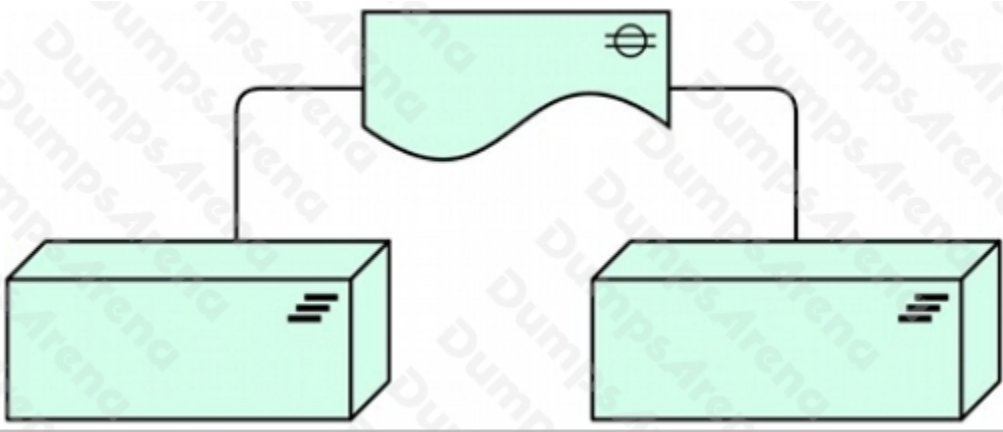
Which of the following answers lists the four relationships ordered from the strongest relationship to the weakest relationship?

- A. 1,2,3,4
- B. 1,2,4,3
- C. 4,2,1,3
- D. 4,1,2,3

ANSWER: C

QUESTION NO: 6

Consider the following diagram:



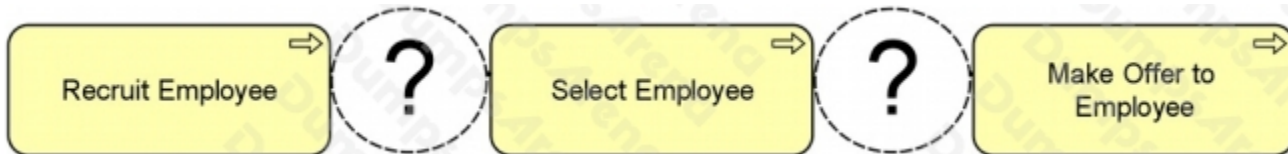
Which of the following best describes what this diagram represents?

- A. Two plateaus with a transition architecture
- B. A deliverable exchanged between two projects
- C. A gap associated with two plateaus
- D. Two nodes connected by a communication path

ANSWER: C

QUESTION NO: 7

At ArchiSurance, the Recruit Employee process passes information to the Select Employee process, which in turn passes information to the Make Offer to Employee process:



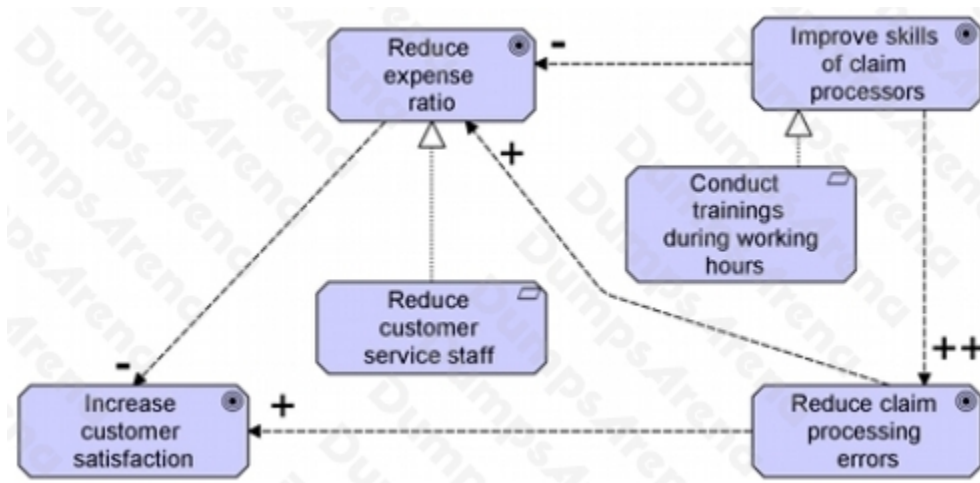
Which ArchiMate relationship should be used to express the passage of information between processes?

- A. Triggering
- B. Access
- C. Flow
- D. Assignment

ANSWER: C

QUESTION NO: 8

The following is an example of an ArchiMate Goal Contribution view:



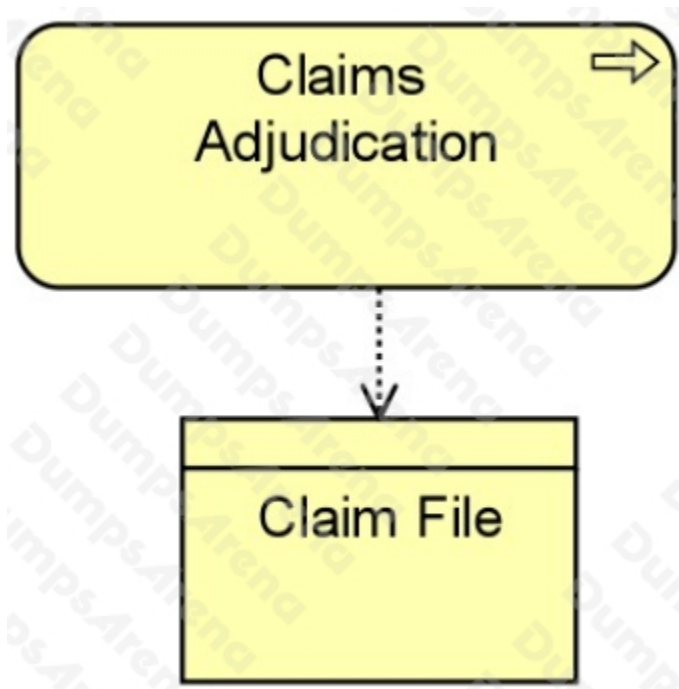
Which goals negatively influence other goals?

- A. Reduce expense ratio and Improve skills of claim processors
- B. Reduce customer service staff and Conduct trainings during working hours
- C. Reduce claim processing errors and Reduce expense ratio
- D. Improve skills of claim processors and Reduce customer service staff

ANSWER: A

QUESTION NO: 9

All ArchiSurance divisions use a Claims Adjudication Process specific to their lines of business to determine whether a claim should be paid as well as the payment amount. Consider the following diagram:



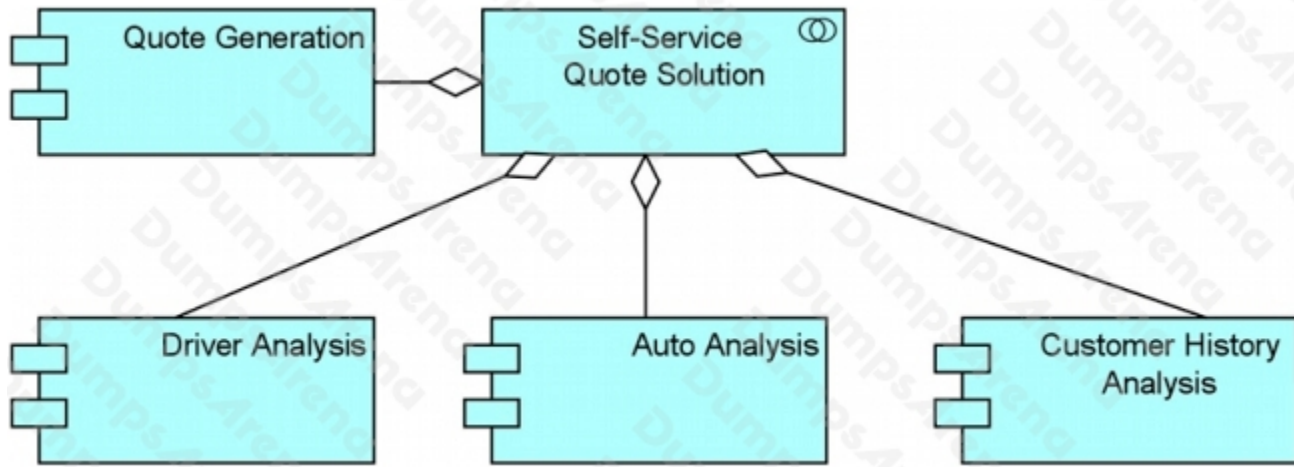
Which of the following statements is expressed by the diagram?

- A. The Claims Adjudication Process realizes the Claim File
- B. Claims are filed after the Claims Adjudication process is complete
- C. The Claims Adjudication team relies on the Claim File to get its work done
- D. The Claims Adjudication process accesses the Claim File

ANSWER: D

QUESTION NO: 10

Consider the following diagram representing part of a key PRO-FIT capability: self-service online price quotes for its auto insurance customers:



Which of the following answers best interprets this diagram?

- A. The Self-Service Quote Solution is an application service that uses four separate application components
- B. The Self-Service Quote Solution is an application collaboration that includes four application components that work together
- C. The Self-Service Quote Solution is an application component that accesses four different types of data objects
- D. The Self-Service Quote Solution is an application component that collaborates with four service modules

ANSWER: B